



1st-5th Grade Summer Reading and Math Program

Dear TCA Students and Parents,

Is your child complaining he or she is bored with nothing to do? Is it too hot outside, are there only reruns on television or are the mosquitoes biting too much?

Well, we have some answers for you! TCA is offering a Summer Reading & Math incentive program.

Attached you will find your child's summer reading log and math packet composed by the TCA faculty.

The teachers at TCA invite you to join TCA's Summer Reading & Math Program!

The attached list offers **suggestions** of books and authors your child could choose to read this summer. Parents may read books to younger-grade children. You may **substitute** any non-fiction or fiction book on the list for another book on your child's reading level. You may also read any book by the same author marked with the word "series".

The attached math packet allows your child a chance to review the skills they learned this year and to keep their brains sharp for the 2023-2024 school year!

TCA Summer Reading & Math Program Prize:

Students who complete the Summer Reading Log and the entire Math Packet will earn 2 homework passes and a Popsicle/Picnic Party with Mrs. Sara during the second week of school!

THE READING LOG & MATH PACKET MUST BE SUBMITTED TO YOUR CHILD'S HOMEROOM TEACHER ON THE FIRST DAY OF SCHOOL. NO EXCEPTIONS WILL BE MADE!

TCA 2nd Grade School Supplies List 2023-24

- 2 1-inch binders
- Zipper pouch (with a clear pocket)
- 1 spiral notebook
- 2 packs of Ticonderoga or USA Gold brand pencils
- 1 pair of child size scissors
- 12-16 glue sticks
- 3 boxes of Crayola crayons
- 1 pack of markers
- 1 pack of highlighters (any color)
- 2 packs of white copy paper
- 1 pack of white cardstock
- 1 pack of color copy paper (any color)
- 1 plastic folder (any design) (doesn't need prongs)
- 2 packs of dry-erase markers (any color)
- 1 supply box
- 1 box of band-aids
- 1 container of Clorox wipes
- 2-3 rolls of paper towels
- 3 boxes of Kleenex
- 1 chair bag (will return at the end of year)
- Gallon ziploc bags (boys)
- Sandwich ziploc bags (girls)

Wish List

- Laminating sheets
- Treasure chest items
- Black Sharpie markers
- Index cards




JUNE



's Reading Log

BOOK	DATE	FOR HOW LONG?	RATING	PARENT INITIALS
			☆☆☆☆☆	
			☆☆☆☆☆	
			☆☆☆☆☆	
			☆☆☆☆☆	
			☆☆☆☆☆	
			☆☆☆☆☆	
			☆☆☆☆☆	
			☆☆☆☆☆	
			☆☆☆☆☆	
			☆☆☆☆☆	
			☆☆☆☆☆	
			☆☆☆☆☆	
			☆☆☆☆☆	
			☆☆☆☆☆	



JULY



's Reading Log

BOOK	DATE	FOR HOW LONG?	RATING	PARENT INITIALS
			☆☆☆☆☆	
			☆☆☆☆☆	
			☆☆☆☆☆	
			☆☆☆☆☆	
			☆☆☆☆☆	
			☆☆☆☆☆	
			☆☆☆☆☆	
			☆☆☆☆☆	
			☆☆☆☆☆	
			☆☆☆☆☆	
			☆☆☆☆☆	
			☆☆☆☆☆	
			☆☆☆☆☆	



2nd Grade Summer Reading List



SHOP THIS LIST (<https://amzn.to/3gqjeO4>)

GRAPHIC NOVELS

Cat Kid Comic Club by Dav Pilkey
Bird and Squirrel on Ice by James Burks
Mr. Wolf's Class by Aron Nels Steinke
Cat Ninja by Matthew Cody
King of the Birds by Elise Gravel
Guinea Pig, Pet Shop Private Eye by Colleen AF Venable

REALISTIC

Good Dog by Cam Higgins
Too Small Tola by Atinuke
Dory Fantasmagory by Abby Hanlon
Stink by Megan McDonald
Bark Park by Brandi Dougherty
The Amazing Life of Azaleah Lane by Nikki Shannon Smith
Baloney and Friends Going Up! by Greg Pizzoli
Planet Omar by Zanib Mian

MAGIC

Zoey and Sassafras by Asia Citro
Diary of an Ice Princess by Christina Soontornvat
Rise of the Earth Dragon by Tracey West
Magical Animal Adoption Agency by Kallie George
The Fabled Stables by Jonathan Auxier
Sophia and Rainbow by Julie Skyes

FUNNY

The Dragonsitter by Josh Lacey
Stick Dog by Tom Watson
The Case of the Weird Blue Chicken by Doreen Cronin
Real Pigeons Fight Crime by Ben Wood
Rabbit & Bear. Rabbit's Bad Habits by Julian Gough & Jim Field





MYSTERIES

Magic Tree House The Graphic Novel Dinosaurs Before Dark by Mary Pope Osborne

The Whodunit Detective Agency by Martin Widmark

A to Z Mysteries by Ron Roy

Secret Spy Society The Case of the Missing Cheetah by Veronica Mang

The Big Bad Detective Agency by Bruce Hale

Mac Undercover (Kid Spy #1) by Mac Barnett

Crime Bites: My Dog Is Better Than Your Dog by Tommy Greenwald

ADVENTURE

Mia Mayhem Is a Superhero! by Kara West

Magic Tree House by Mary Pope Osborne

Galaxy Zack by Ray O'Ryan

The Notebook of Doom by Troy Cummings

Ricky Ricotta's Mighty Robot by Dav Pilkey

Ivy Lost and Found by Cynthia Lord

NONFICTION

Fox Explores the Night by Martin Jenkins

What Do They Do With All That Poo? by Jane Kurtz

Plants Fight Back by Lisa J. Amstutz

The Rat by Elise Gravel

BUGS! by James Buckley, Jr.

Planets by Elizabeth Carney

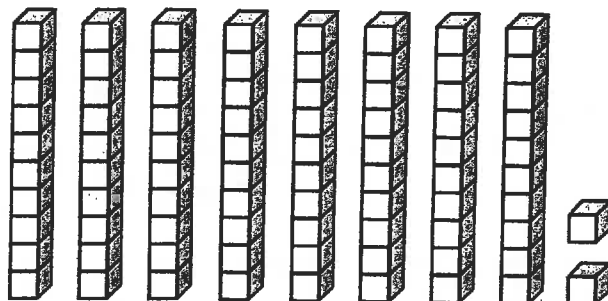
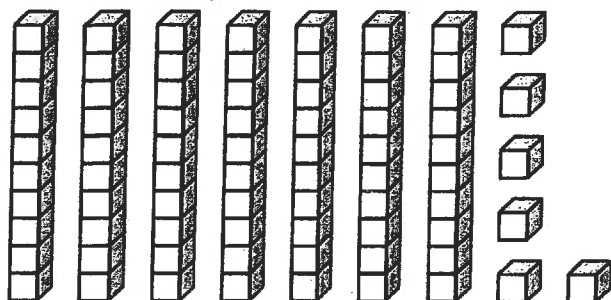


Name: _____



Math Buzz

Compare. Write $>$, $<$, $=$.



Complete the table.

Number of Bicycles	1	2	3	4	5
Number of Wheels	2	4			

Match each coin to its name and value.

penny

nickel

dime

quarter



25¢



1¢

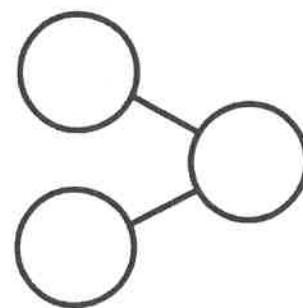



5¢



10¢

Fill in the number bond to match the domino.



Count by ones.

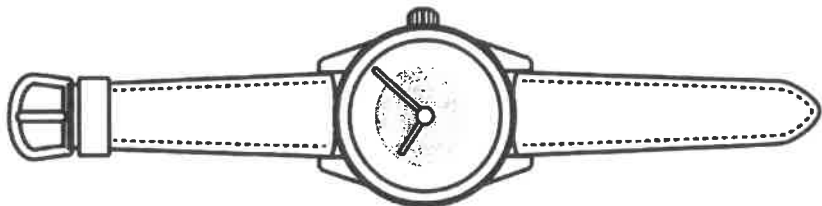
21		23		25		27		29	
	32		34		36		38		40
41		43		45		47		49	

Name: _____



Math Buzz

How many squares long is the watch?



answer: _____ squares



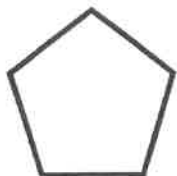
The team scored 7 goals in the first half and 6 goals in the second half. How many goals did the team score in all?

?	
7	6

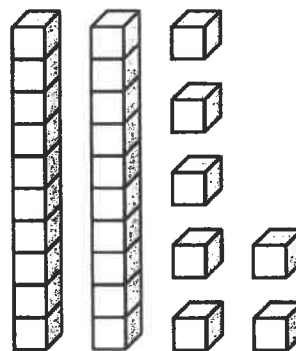
_____ + _____ = _____

answer: _____ goals

Color the shapes with 4 sides.



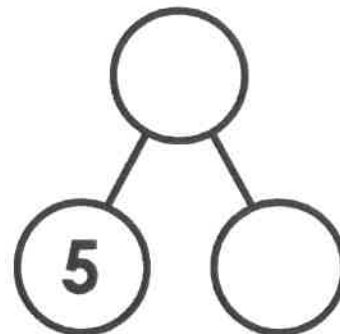
Write how many tens and ones. Write the number.



Tens	Ones

answer: _____

Make a group of 5. Then, complete the number bond.




Name: _____

Subtraction Stories

Draw a picture to help you find the answer to each question. Then write a number sentence.


- a.** Jenna had 8 stickers.
She gave 3 to her friend.
How many stickers did she have left?

number sentence: _____



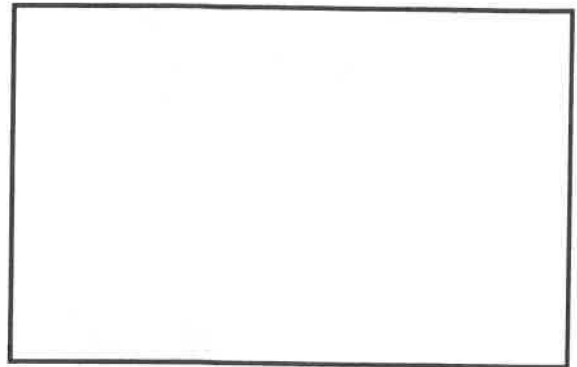
- b.** Roberto saw 5 birds in a tree.
2 flew away.
How many were left?

number sentence: _____




- c.** Carla's hens laid 10 eggs.
6 were brown. The rest were white.
How many eggs were white?

number sentence: _____



- d.** Kai had 6 bananas.
He ate 1.
How many did he have left?



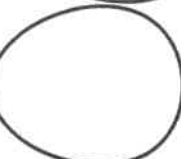







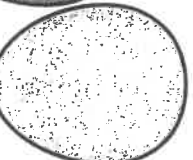








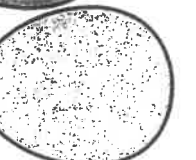




number sentence: _____



Name: _____

Count by 2s

Count by 2s and fill in the missing numbers in the balloons.

Name: _____

2-Digit Addition Without Regrouping

Shape Addition



Find the sum of the numbers
in the hearts.

Find the sum of the numbers
in the triangles.

Find the sum of the numbers
in the diamonds.

Find the sum of the numbers
in the squares.

Find the sum of the numbers
in the trapezoids.

Find the sum of the numbers
in the circles.

Name: _____


2-Digit Addition without Regrouping

Addition

Find the sums.

a.
$$\begin{array}{r} 32 \\ + 15 \\ \hline \end{array}$$

b.
$$\begin{array}{r} 44 \\ + 34 \\ \hline \end{array}$$



c.
$$\begin{array}{r} 41 \\ + 10 \\ \hline \end{array}$$

d.
$$\begin{array}{r} 20 \\ + 29 \\ \hline \end{array}$$

e.
$$\begin{array}{r} 62 \\ + 6 \\ \hline \end{array}$$

f.
$$\begin{array}{r} 72 \\ + 26 \\ \hline \end{array}$$

g.
$$\begin{array}{r} 34 \\ + 23 \\ \hline \end{array}$$

h.
$$\begin{array}{r} 5 \\ + 61 \\ \hline \end{array}$$

i.
$$\begin{array}{r} 54 \\ + 20 \\ \hline \end{array}$$

j.
$$\begin{array}{r} 83 \\ + 16 \\ \hline \end{array}$$

- k. Diego has 25 toy cars.
Sara has 13 toy cars.
How many toy cars do they have altogether? _____

- l. Sara has 34 dolls.
Diego gives her 3 more.
How many dolls does she have in all? _____

Name: _____



Math Buzz

Compare. Circle the words that make the number sentence true.

is greater than

54

is less than

45

is equal to

Enzo's new pencil is 16 centimeters long. His old pencil is 8 centimeters long. How much longer is Enzo's new pencil?

Show your work

answer: _____ centimeters

Match the coins that have the same value.



Count by ones.

	72		74		76		78		80
81		83		85		87		89	
	92		94		96		98		100

Add.

$$4 + 5 = \underline{\quad}$$

$$3 + 7 = \underline{\quad}$$

$$1 + 6 = \underline{\quad}$$

Name: _____



Math Buzz


Fill in the time shown.



:



:



:



:

Add.

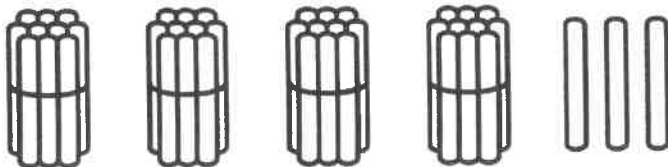
$$\begin{array}{r} 8 \\ + 2 \\ \hline \end{array} \quad \begin{array}{r} 4 \\ + 4 \\ \hline \end{array} \quad \begin{array}{r} 3 \\ + 6 \\ \hline \end{array}$$

Find the total value of Vivi's coins.



answer: _____ ¢

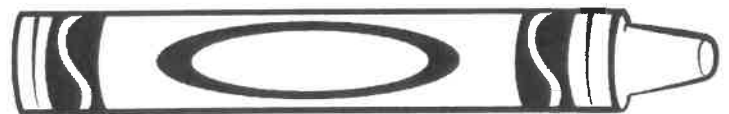
Count the objects and fill in the chart.



Tens	Ones

answer: _____

How many tiles long is the crayon?

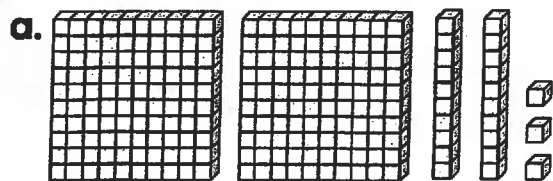


answer: _____ tiles

Name: _____

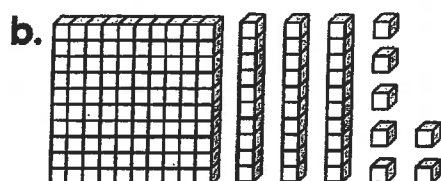
Place Value: Hundreds, Tens, and Ones

Place Value



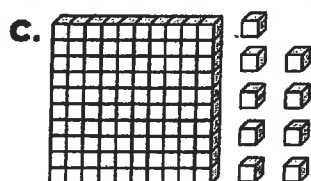
hundreds	tens	ones

number



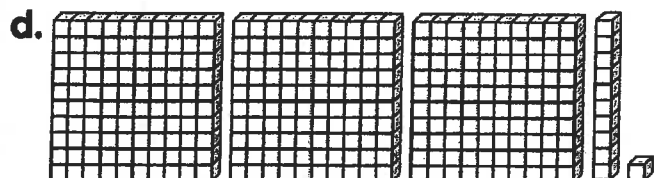
hundreds	tens	ones

number



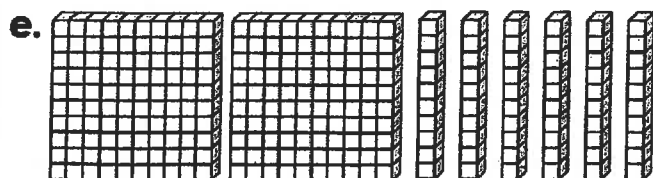
hundreds	tens	ones

number



hundreds	tens	ones

number



hundreds	tens	ones

number

120 Chart

[illegible]

Name: _____

Math Buzz



Dally Math Practice

B

005

Use the picture graph to answer the questions below.

Lunch Count								
Hot Lunch								
PB & J								
Home Lunch								

Each = 1 student

Which lunch was chosen by 6 students? _____

Which lunch choice had the most students? _____

How many students ate lunch in all? _____

Circle the shapes that have two equal parts.



Add.

$$\begin{array}{r} 3 \\ + 4 \\ \hline \end{array}$$


$$\begin{array}{r} 2 \\ + 6 \\ \hline \end{array}$$

$$\begin{array}{r} 9 \\ + 0 \\ \hline \end{array}$$

Circle **two** different ways to write the number **36**.

- a. thirty - six b. 36 tens
c. 3 tens 6 ones d. 3 + 6

Circle the object that is taller.



Name: _____

Telling Time

Write the time shown.

